



Oblicz, a następnie odzyskaj poprawny wynik na kratownicy i zamaluj kwadrat według podanego wzoru.


Weronika Figurska-Zięba




$$6^{-5} : 6^{-2}$$



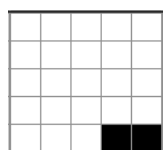
$$[5^{-1} : (5^2)^3] \cdot 5^3$$




$$(13^2 : 13^5)^{-1} \cdot 13^{-2}$$




$$(4^2)^{-3} : (4^{-4})^2 : 4^{-1}$$




$$(2^3 : 2^{-5})(2^{-4} : 2^{-2})^{-1}$$




$$2^{82} : 4^{40}$$




$$\frac{18^4}{9^4}$$



$$\frac{2^{15} \cdot 27^4}{6^{15}}$$

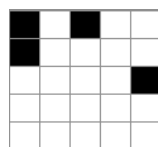


$$(5^2)^3 \cdot 2^6$$

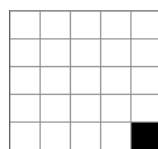


$$0,2^8 \cdot 25^4$$

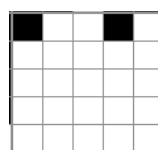
216	1024	64	2401
125	1 000 000	4	$\frac{1}{6}$
13	$\frac{1}{216}$	$\frac{1}{27}$	$\frac{1}{625}$
121	16	5	1




$$5^8 : 0,2^{-7}$$




$$\frac{125^3 \cdot (5^{-2})^4}{25^4 \cdot 25^{-5}}$$



$$\frac{6^{-3} \cdot (6^2)^{-5}}{\left(\frac{1}{36}\right)^6}$$



$$\frac{(121^2)^3}{\left(\frac{1}{11}\right)^{-8}} \cdot 11^{-2}$$



$$\frac{7^5 : 49}{7} \cdot \left(\frac{1}{7}\right)^{-2}$$