




Wykonaj działania, a następnie odszukaj wynik na kratownicy i zamaluj według podanego wzoru. Powodzenia! :)




$14+99=$




$82+18=$




$35+61=$




$48+46=$




$77+18=$




$27+45+13=$




$38+37+33=$




$81+122+19=$



$182+43+18=$




$78-13=$




$87-44=$

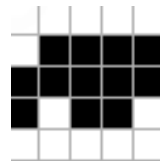
54	118	43	71	45
100	40	95	113	96
75	222	13	38	85
94	243	200	108	25
37	22	65	90	84




$82-45=$




$16+78+24=$




$86-73=$



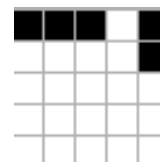
Od jakiej liczby trzeba odjąć 46 żeby otrzymać 154?




$63-23=$




Ile trzeba odjąć od 176 żeby otrzymać 154?



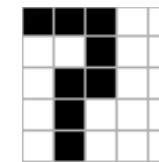
$64+26=$




o 13 więcej od 58




$42-17=$




o 13 mniej od 58




$170-95=$



o 15 więcej od 69



$71-33=$



o 15 mniej od 69